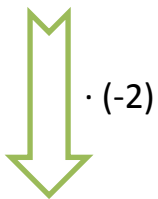


## Zadanie

1. Uzupełnij grafy:

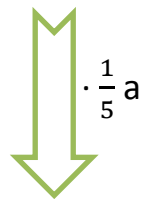
$$8a^2 - 4b^2$$



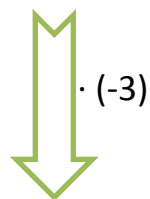
$$\frac{1}{3} - 6y^3$$



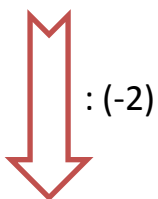
$$5ab^2 - b$$



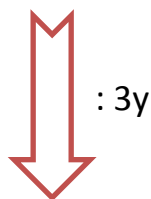
$$\frac{2}{3}s^2 + \frac{1}{3}t$$



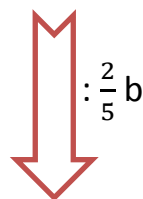
$$8a^2 - 4ab^2$$



$$\frac{9}{3}y - 6xy^3$$



$$4ab^2 - b$$



$$\frac{2}{3}s^2 + \frac{1}{3}st$$

